


1 How many pears are there?



$$\square + \square + \square = \square$$

$$\square \times \square = \square$$

There are pears.

2 How many stars are there?




$$\square + \square = \square$$

$$\square \times \square = \square$$


There are stars.

3 Write two additions and two multiplications for the array.



What do you notice?

4 Write two multiplications for this array.




5 Draw an array to show 7×3
Complete the number sentence.

$$7 \times 3 = \square$$

Is there more than one way to draw the array?


6 Draw three different arrays to show 12

- 3 Write two additions and two multiplications for the array.



What do you notice?

- 4 Write two multiplications for this array.



- 5 Draw an array to show 7×3
Complete the number sentence.

$$7 \times 3 = \square$$

Is there more than one way to draw the array?


- 6 Draw three different arrays to show 12

- 7 Draw dots to show each multiplication in two ways.

The first one has been done for you.

Multiplication	Array 1	Array 2
3×8		
2×5		
4×9		
6×1		

- 8 Can you see the multiplications 5×4 and 4×5 in the array?



Talk about it with a partner.

The Explorer

The explorer was in the jungle,
She tangled in the trees,
Her wild tummy rumbled,
She could hear the buzz of bees...

The explorer crossed a stream,
She splashed through the bubbles,
The water was so deep,
The explorer was in trouble...

The explorer climbed a mountain,
Her head was in the clouds,
Then she heard some shouting,
"It's time for dinner now!"

The explorer wasn't in the jungle,
Or a mountain or a stream,
She just explored her garden,
But her imagination was free!

VOCABULARY FOCUS

1. Which of these words don't describe a sound
rumbled splashed garden
2. Which of these words describe a movement?
climbed mountain explorer
3. Which word tells you the stream was hard to get through?
crossed tangled deep
4. Which word tells you the Explorer was pretending to travel?



VIPERS QUESTIONS

S

Where are the three places the Explorer pretended to go to?

I

What time of day was the Explorer in the garden?

R

Why did the explorer have to go back inside?

Answers

1. Garden
2. Climbed
3. Deep
4. Imagination

R: Mountain, River, Stream (also accept clouds)

I: Dinner Time / Just before Dinner / Evening / Meal

S: To eat / To eat dinner / they were called back in

Name: .

Date: .

a a a a a a a a

d d d d d d d d

Name: .

Date: .

c c c c c c c c

o o o o o o o o